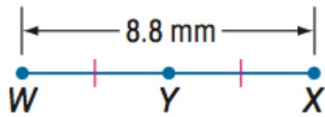


Geometry - BELL WORK

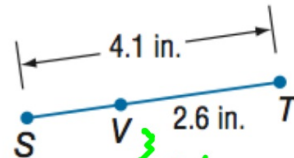
Find the measurement of each segment.

1) \overline{WY}



$$\frac{8.8}{2} = 4.4 \text{ mm}$$

2) \overline{SV}



$$\begin{array}{r} 4.1 \\ - 2.6 \\ \hline 1.5 \text{ in} \end{array}$$

1-3 Distance and Midpoints

We have:

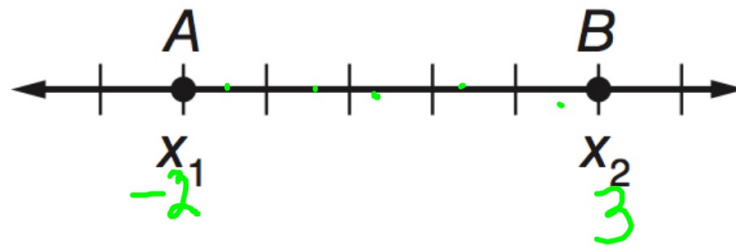
Measured segments and found unknown segment lengths.
Graphed on the coordinate plane.

Today we will:

Find the distance between two points.
Find the midpoint of a segment.

G-CO: Experiment with transformations in the plane.

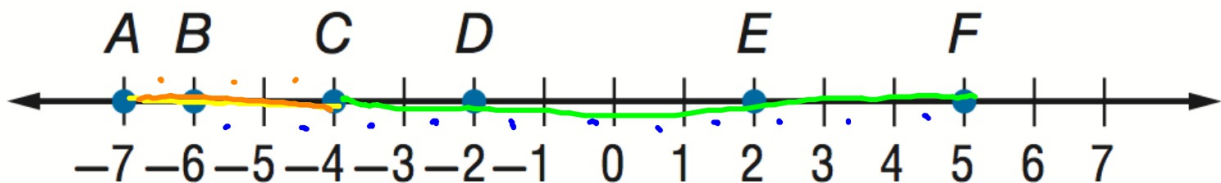
Distance between two points on the number line:



$$AB = |x_1 - x_2| \text{ or } |x_2 - x_1|$$

The distance is the difference between the two numbers.

$$|-2 - 3|$$
$$|-5| = 5$$



Use the number line to find each measure.

1) AC

$$|-7 - (-4)|$$
$$|-3| = 3$$

2) CF

$$|-4 - 5|$$
$$|-9| = 9$$

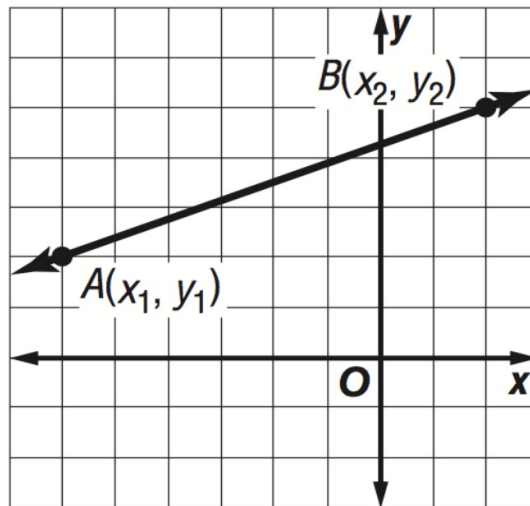
3) FB

$$|5 - (-6)|$$
$$|11| = 11$$

To find the distance between two points on the coordinate plane, we use the distance formula:

Distance Formula:

$$d = \sqrt{(x_2 - x_1)^2 + (y_2 - y_1)^2}$$

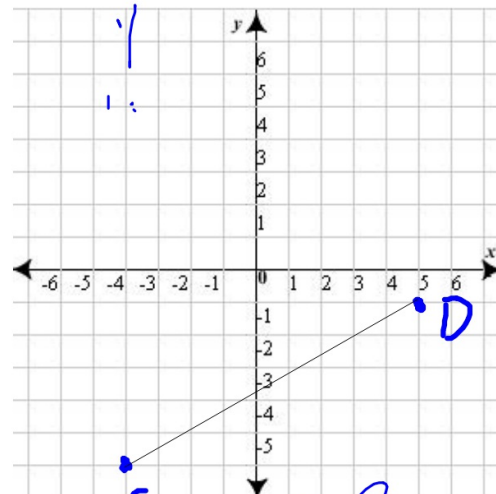


Find the distance between C(-4, -6) and D(5, -1)

x_1, y_1 x_2, y_2

Distance Formula:

$$d = \sqrt{(x_2 - x_1)^2 + (y_2 - y_1)^2}$$



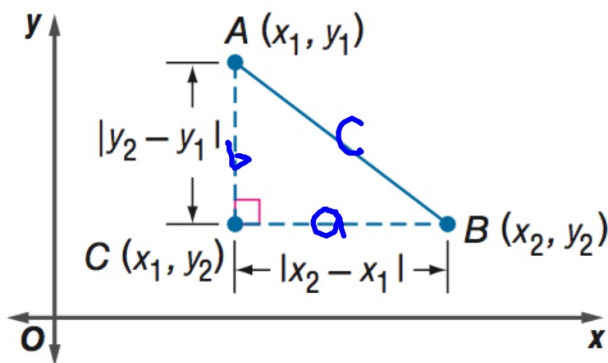
$$\sqrt{(5 - (-4))^2 + (-1 - (-6))^2}$$

$$\sqrt{9^2 + 5^2}$$

$$81 + 25 = \sqrt{106} = 10.2956$$

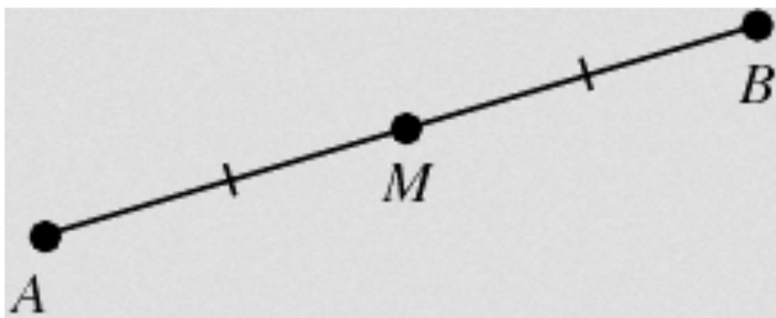
10.3

Notice, the distance formula is just the Pythagorean Theorem!

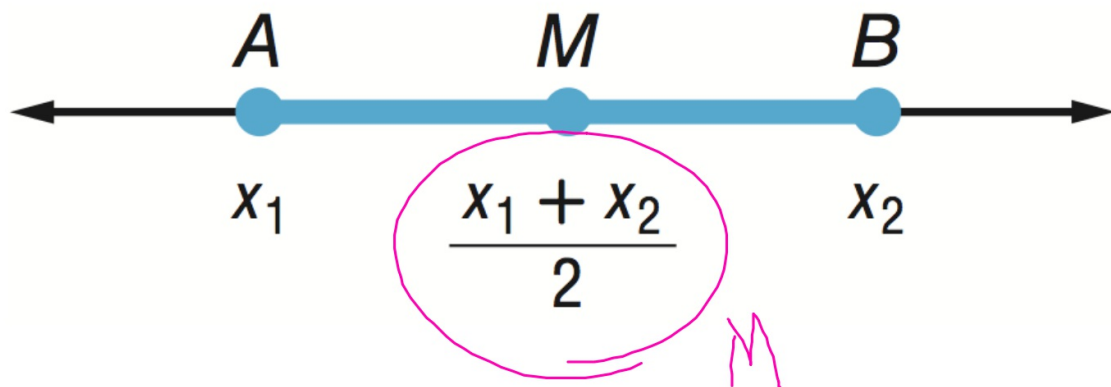


$$\begin{aligned}(CB)^2 + (AC)^2 &= (AB)^2 \\ (|x_2 - x_1|)^2 + (|y_2 - y_1|)^2 &= (AB)^2 \\ (x_2 - x_1)^2 + (y_2 - y_1)^2 &= (AB)^2 \\ \sqrt{(x_2 - x_1)^2 + (y_2 - y_1)^2} &= AB\end{aligned}$$

The **midpoint** of a line segment is the point halfway between the endpoints.



Midpoint Formula (on Number Line)



The midpoint is the **average** of the two points.

TEMPERATURE The temperature on a thermometer dropped from a reading of 25° to -8° . Find the midpoint of these temperatures.

Midpoint of 25 and -8

$$\frac{25 + (-8)}{2} = \frac{17}{2} = 8.5$$