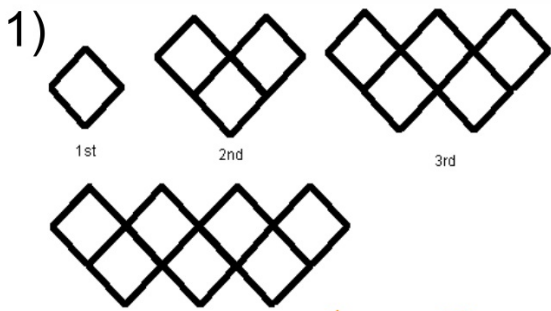


Geometry: Bell Work

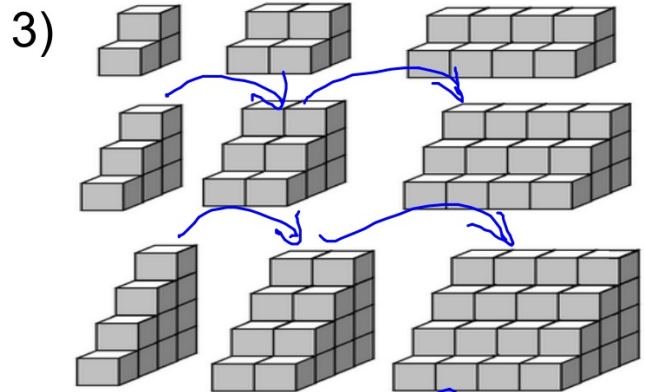
Describe the pattern.



goes up by 2
increase by 2
add 2
2 more boxes in a zig
zag

2) 135, 129, 123, 117...

subtract 6



times 2

Pull out a piece of paper.
It should be whole, not ripped.

From this piece of paper, create a
perfect square. You may fold it or
cut it, but no rulers are allowed.

Explain your square.

A blue banner with a white border. On the left, the word "LESSON" is written vertically in white. To its right, the numbers "2-1" are displayed in a large, light blue font. Further right, the text "Inductive Reasoning and Conjecture" is written in a bold, white font.

LESSON 2-1 Inductive Reasoning and Conjecture

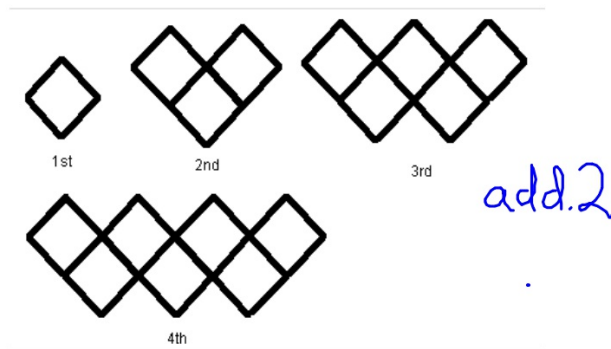
We have worked with points lines and planes, the foundation of geometry.

Now we're switching gears to discuss the types of reasoning that we use to make statements about geometry, and about math in general.

We will use inductive reasoning to make conjectures and find counterexamples.

Inductive reasoning is reasoning that uses specific examples to arrive at a conclusion

For example, continuing a pattern.



A **conjecture** is the conclusion reached from the inductive reasoning.

Write a conjecture that describes the pattern in the sequence. Then use your conjecture to find the next item in the sequence.

Movie show times: 8:30 A.M., 9:45 A.M., 11:00 A.M., 12:15 P.M., ...

Movies are shown every

1h 15min

1:30 P.M.

Write a conjecture that describes the pattern in each sequence. Then use your conjecture to find the next item in the sequence.

B. 10, 4, -2, -8, ...

Subtract 6

- 14

2B. the relationship between AB and EF , if $AB = CD$ and $CD = EF$

AB means the length of \overline{AB}

$$AB = EF$$


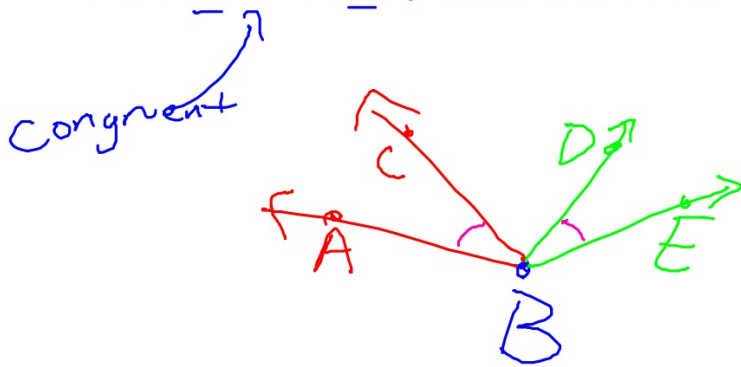
If there is just a single example that goes against the conjecture, then *the entire conjecture* is considered **false**.

This false example is called a **counterexample**. A counterexample can be a number, a drawing, or a statement.

Find a counterexample to show each conjecture is false.

- a) All birds fly penguin kiwi
 ostrich
- b) The sum of two numbers is greater than either number.
 $0 + 5 = 5$ $-3 + (-5) = -8$
- c) If $\angle ABC \cong \angle DBE$, then $\angle ABC$ and $\angle DBE$ are vertical angles.

If $\angle ABC \cong \angle DBE$, then $\angle ABC$ and $\angle DBE$ are vertical angles.



A blue banner with a dark blue vertical bar on the left containing the word "LESSON" in white. To the right of the bar, the numbers "2-1" are displayed in a large, light blue font. Further right, the text "Inductive Reasoning and Conjecture" is written in a white, bold, sans-serif font.

LESSON 2-1 Inductive Reasoning and Conjecture

We discussed the types of reasoning that we use to make statements about geometry, and about math in general.

We used inductive reasoning to make conjectures and find counterexamples.

Stop and Jot (exit ticket):

Make a conjecture that is true. Cite evidence or reasoning to explain why your conjecture is true.

Write a conjecture that is false. Give a counter example to your conjecture.

Assignment:

2.1 pgs 92-93 # 1-13